

2007 MathEdge+ Intermediate Level Contest

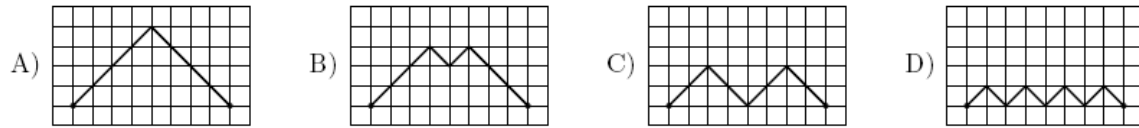
Please box the answer. No partial credit will be given. Only correct answer counts. No Calculator. 45 mins

1) Using only digits 1, 2, and 3, how many different 1-, 2-, or 3-digit counting numbers can one make?

2) Using 6 matches, only one rectangle with a perimeter of 6 matches can be made (see the picture). How many different rectangles with a perimeter of 18 matches can be made?



3) Between two points four routes are drawn. Which route is the shortest?



4) 100% of a number is equal to 964. What is the number?

5) On each day that Andy does his homework his mother gives him \$4, and on days he doesn't she takes \$1 away from him. After 30 days Andy notices that he has the same amount of money as when he started even though he has spent nothing and had no other source of income. On how many of the 30 days did he do his homework?

6) Ada has 14 gray balls, 8 white balls and 6 black balls in a bag. What is the least number of the balls she has to take out of her bag having her eyes closed to make sure that she took at least one ball of each color?

7) Alisa's phone number is a 7-digit number where each digit is greater than each of the digits to its left. Her phone number doesn't start with 0 or 1. How many different phone numbers can be her phone number?

8) Find a prime number p such that $23p + 1$ is also prime.

9) Mrs. Jones has two sons whose ages differ by 1. In 2002, the age of Mrs. Jones was 8 times the sum of her sons'. In 2007, the age of Mrs. Jones was 3 times the sum of her sons'. How old was Mrs. Jones when her elder son was born?

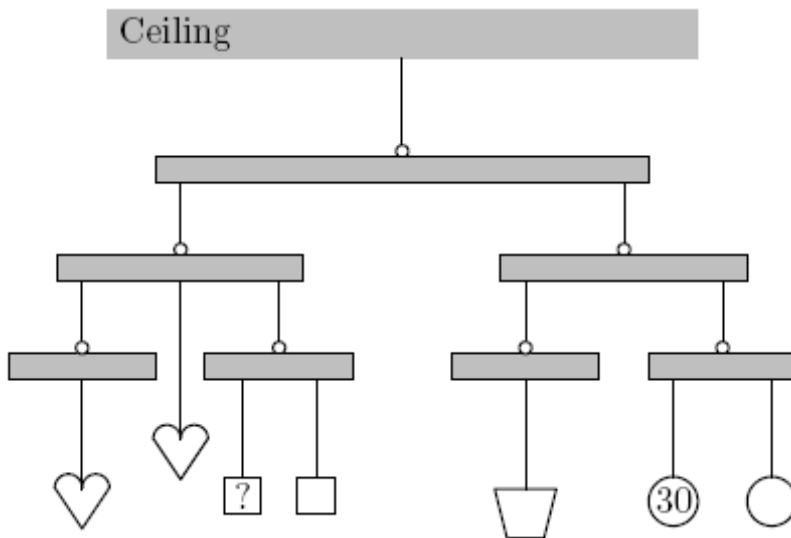
2007 MathEdge+ Intermediate Level Contest

Please box the answer. No partial credit will be given. Only correct answer counts. No Calculator. 45 mins

- 10) Below are two zig-zag shapes made of identical little squares 1 cm on a side. The first shape has 6 squares and a perimeter of 14 cm. The second has 9 squares and a perimeter of 20 cm. What is the perimeter of the zig-zag shape with 15 squares?



- 11) The weights in the figure are in balance. The same shapes have the same weight. The weight of each circular shape is 30 ounces. What is the weight of the square shape indicated with the question mark?



- 12) In the addition problem below, the square, the triangle, and the circle represent a different digit. What is the digit sum of one square and one circle?

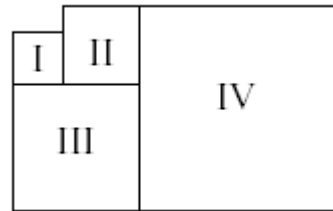
$$\begin{array}{r}
 \square \square \square \\
 \square \square \circ \\
 + \square \triangle \triangle \\
 \hline
 2003
 \end{array}$$

2007 MathEdge+ Intermediate Level Contest

Please box the answer. No partial credit will be given. Only correct answer counts. No Calculator. 45 mins

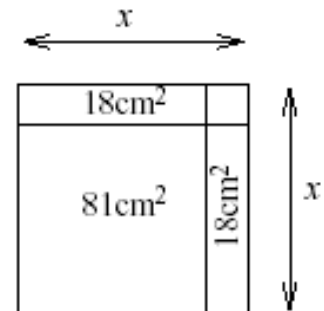
13) The cyclist went up the hill with the speed of 12 km/h and went down the hill with the speed of 20 km/h. The ride up the hill took him 16 minutes longer than the ride down the hill. How many minutes did the cyclist take to go down the hill?

14) Figures I, II, III and IV are squares. The perimeter of square I is equal to 16 units, and the perimeter of square II is equal to 24 units. The perimeter of square IV is equal to:



15) In a chess tournament, 32 players were competing by rounds of eliminations. In each round all the players were divided into groups of four. In each of these groups every player played once with every other player. The two best players from the group went to the next round and the two worst players were out of the competition. After the round in which four last players played, the two best players were playing an additional final game to determine the champion. How many total number of games were played during the entire tournament?

16) A square with the length of side equal to x consists of a square with an area of 81 cm^2 , two rectangles with areas of 18 cm^2 each, and a small square. What is the value of x ?

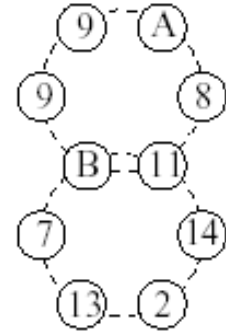


2007 MathEdge+ Intermediate Level Contest

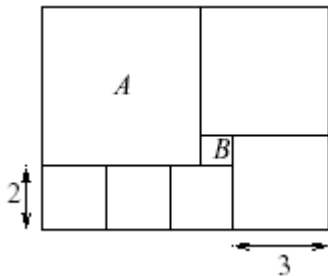
Please box the answer. No partial credit will be given. Only correct answer counts. No Calculator. 45 mins

17) Emily has 29 balls consist of four colors: yellow, green, blue, and black. 19 of them are not green, 5 are black, and 18 are not yellow. How many blue balls does Emily have?

18) Two of the numbers located on the two circles (see the picture) are represented by letters A and B. The sum of the numbers on each circle is equal to 55. What number is represented by letter A?



19) The figure in the picture consists of 7 squares. Square A has the greatest area, and square B - the smallest area. The lengths of two of the squares are given. How many B squares will it take to fill up square A completely?



20) Let ABC be the right triangle with $AB = 3$, $BC = 5$, $AC = 4$. Find the length of the altitude AH from A to BC.

